

PATTERNS

House 1 is made up of 2 shapes (parts).

House 2 is made up of 4 shapes.

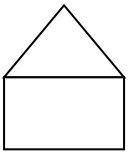
House 3 is made up of 6 shapes.

How many shapes will House 4 have? _____

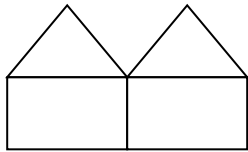
How many shapes will House 8 have? _____

Draw a picture of each of the 8 houses and write the Pattern Rule.

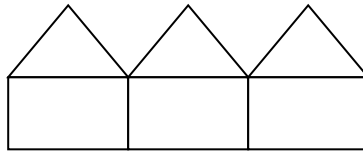
Pattern Rule: _____



1



2



3

4

5

6

7

8